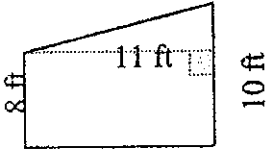


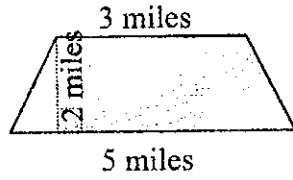
Name _____ Period _____ Date _____

Area of a Trapezoid

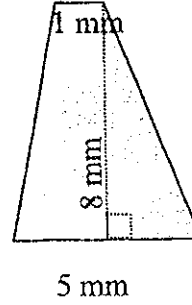
1) $A =$ _____



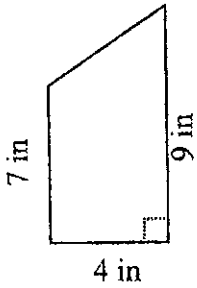
2) $A =$ _____



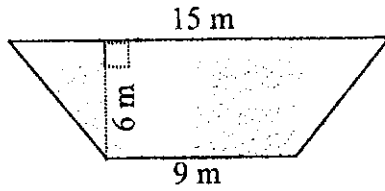
3) $A =$ _____



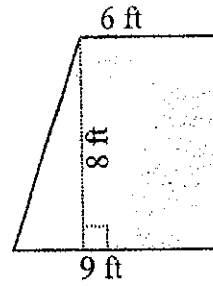
4) $A =$ _____



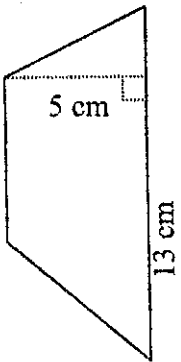
5) $A =$ _____



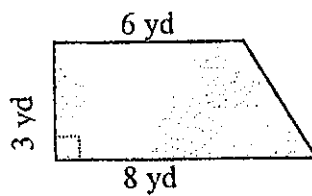
6) $A =$ _____



7) $A =$ _____



8) $A =$ _____



9) $A =$ _____

