

Lesson Summary

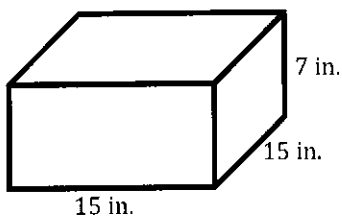
Surface Area Formula for a Rectangular Prism:  $SA = 2lw + 2lh + 2wh$

Surface Area Formula for a Cube:  $SA = 6s^2$

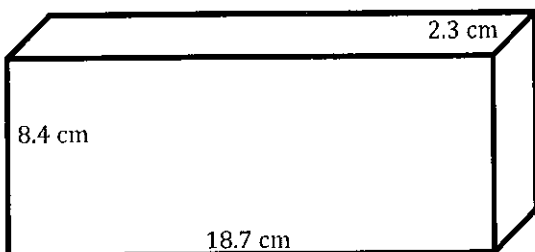
Problem Set

Calculate the surface area of each figure below. Figures are not drawn to scale.

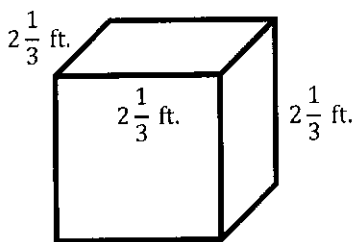
1.



2.



3.



4.

